

ethyne

propyne

butyne

pentyne

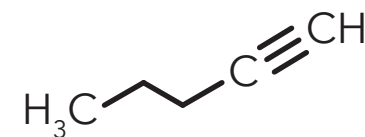
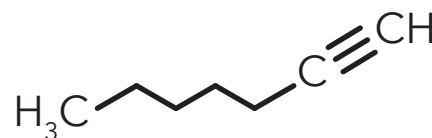
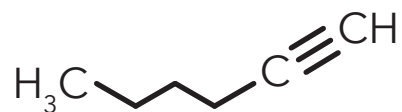
hexyne

heptyne

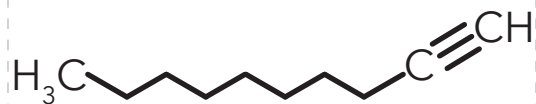
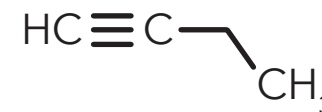
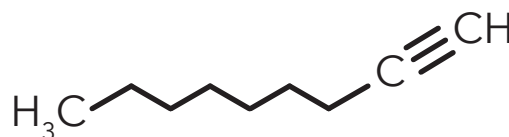
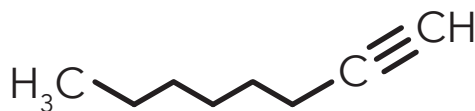
octyne

nonyne

decyne



BONUS: Write the name of an alkyne with molecular formula of C_4H_6



BONUS: Draw the 2D structure of an alkyne with molecular formula of C_4H_6

Alkynes are unsaturated hydrocarbons containing at least one carbon-carbon triple bond.

- 1) Print and cut out cards
- 2) Shuffle
- 3) Match chemical name with 2D and 3D structure

Use with MOLTOYS
Hydrocarbon Alkyne Kit
www.moltoys.com

