

ethene

propene

butene

pentene

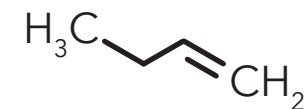
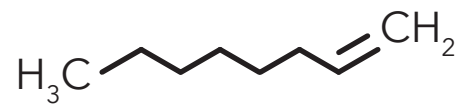
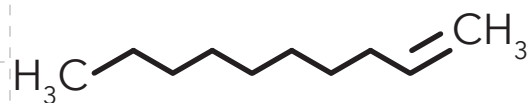
hexene

heptene

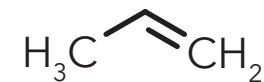

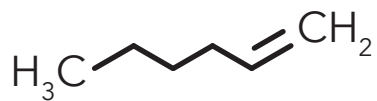
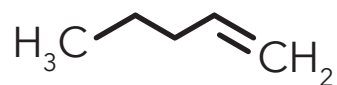
octene

nonene

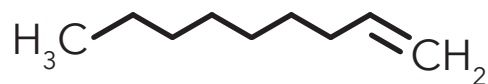
decene



BONUS: Write the name of an alkene with molecular formula of C_4H_8



BONUS: Draw the 2D structure of an alkene with molecular formula of C_4H_8



Alkenes are unsaturated hydrocarbons that contain at least one carbon-carbon double bond.

- 1) Print and cut out cards
- 2) Shuffle
- 3) Match chemical name with 2D and 3D structure

Use with MOLTOYS
Hydrocarbon Alkene Kit
www.moltoys.com

